


校長先生からの挑戦状 ちょうせんじょう 13

年 組 _____

月 日 _____


<ルール> ち ず き ご う め い つぎの地図記号名を答えましょう。

①



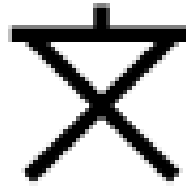
() ()

②



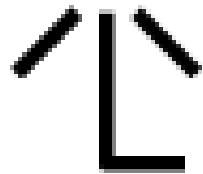
() ()

③

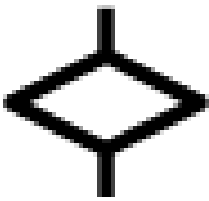


() ()

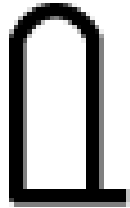
④



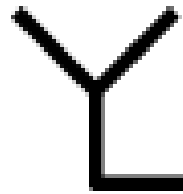
⑤



⑥



⑦



⑧




() ()

() ()

() ()

() ()


⑨



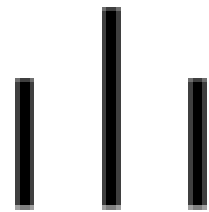
⑩



⑪



⑫




() ()

() ()

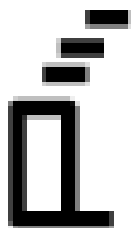
() ()

() ()


⑬




⑭



⑮



⑯



() ()

() ()

() ()

() ()